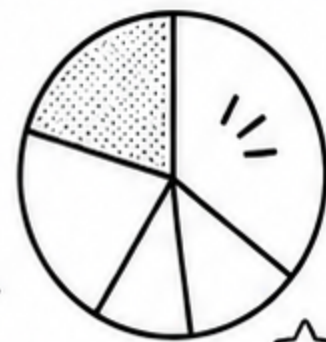




FRACTION FUN



SHADE IT. WRITE IT. KNOW IT!

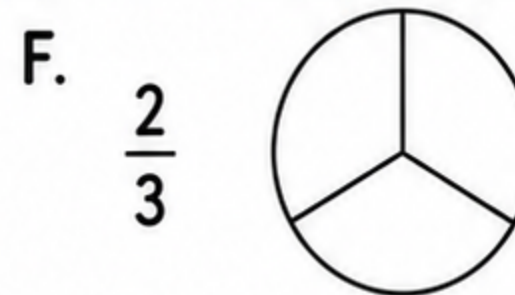
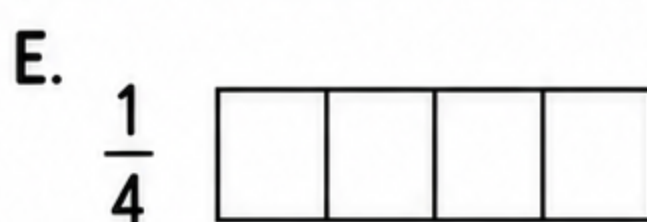
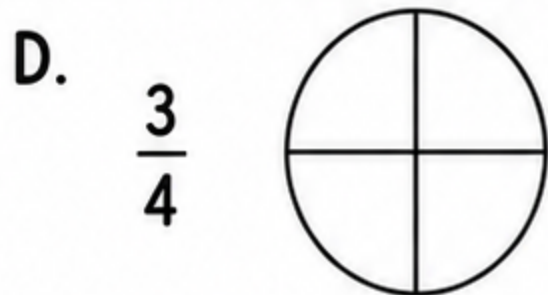
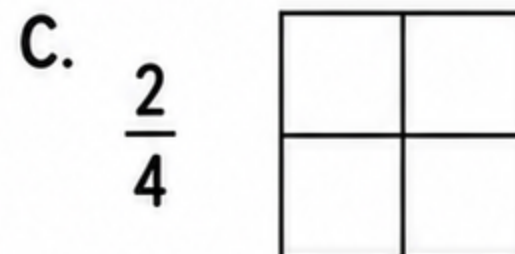
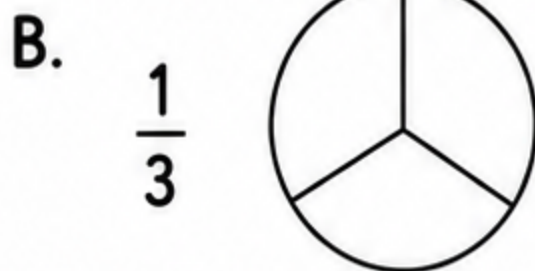
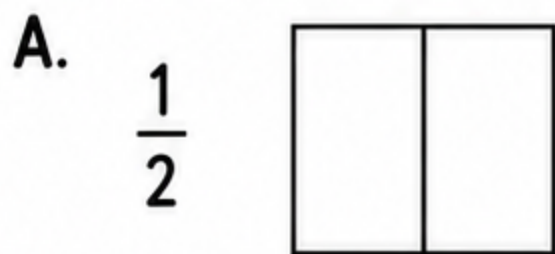


Name: _____

Date: _____

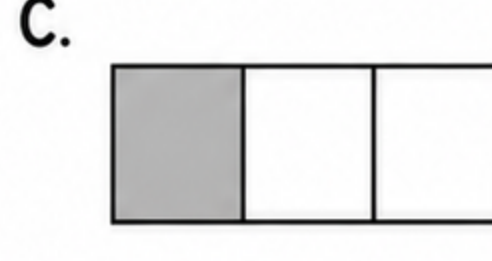
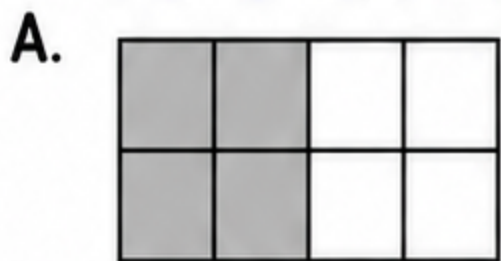
1 SHADE THE FRACTIONS

Shade the shapes to show the fraction.



2 WRITE THE FRACTIONS

Write the fraction that is shaded.



3 TRUE OR FALSE?

Write True or False for each statement.

a. $\frac{1}{2}$ is equal to $\frac{2}{4}$. _____

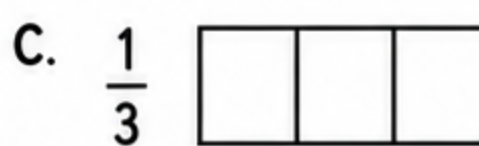
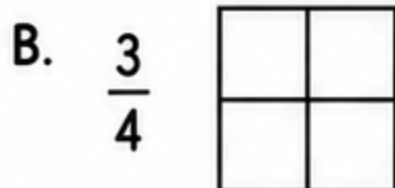
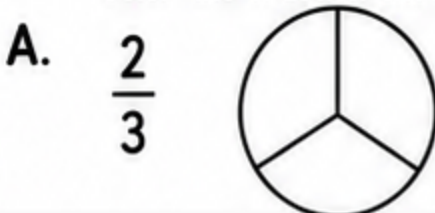
b. $\frac{1}{4}$ is less than $\frac{1}{2}$. _____

c. $\frac{3}{5}$ is greater than $\frac{1}{5}$. _____



4 FRACTION CHALLENGE!

Color the fraction shown.



Bonus!

Draw a shape and shade $\frac{2}{5}$ of it.



Fractions are everywhere!

